



Fractions

Objective

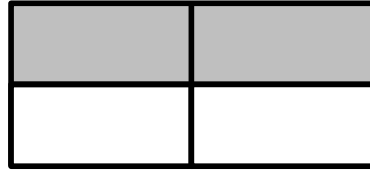
Using fractions to show the proportion of the parts to the whole



Example 1

Colour each figure to show the given fractions.

Fraction: $\frac{2}{4}$




Cut it into four equal parts and colour two parts.



Practice


1)

Fraction: $\frac{5}{9}$



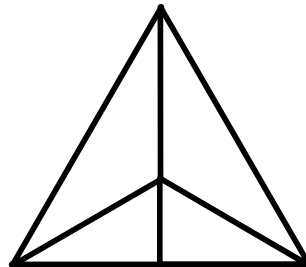
2)

Fraction: $\frac{5}{8}$



3)

Fraction: $\frac{1}{6}$






Exercise

1) Colour each figure to show the given fraction.


(a)

Fraction: $\frac{3}{7}$



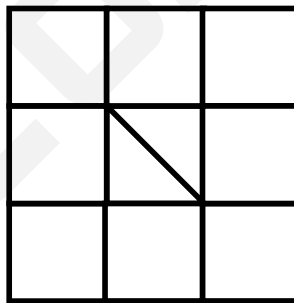
(b)

Fraction: $\frac{5}{8}$



(c)

Fraction: $\frac{13}{18}$



(d)

Fraction: $\frac{5}{8}$

